



N. D. Jain School Bah (Agra)

Class - II

Holiday Homework



G k / Moral

Q 1. Which animal is known as the king of the Jungle?

Q 2. What shape has three sides?

Q 3. What is the Colour of the sky on a clear day?

Q 4. What colour is a ripe Banana ?

Q 5. What do we breathe in to stay alive ?

Moral

Kindness and honesty

Q 1. Should we tell the truth or lie?

Q 2 .Should you share your toys with friends ?

Respect and good manners

Q 1 . How Should we talk to our elders?

Q 2.What do you Say when you need Some things?

Q 3. If your friend falls down, what Should you do?|

class 2 (English Holiday homework)

(1) Write the names of the following pictures in alphabetical order:

Train

Elephant

Owl

Almond

Camel

Kite

Grapes

(2) Write the definitions of Common noun and Proper noun with example.

(3) Write and learn the word meaning of chapter 2 and chapter 3 .

(4) Learn and write the poem ' To My Mother ' from your book .

(5) Write the plural form of the following:

Flower

Day

Gift

Boy

Class

social studies

Q 1. Who does the following activities in your home?

A. Who washes the clothes? _____

B. Who prepares meals? _____

C. Who takes you to the park ? _____

D. Who helps you in learning? _____

Q 2. What is leather?

Q3. Write the five kinds of clothes?

Q 4. What is protective food ? Write any two.

Q 5. Make a chart of , " A Family Tree " .



HOLIDAY HOMEWORK

science



- (1) List 4 examples of herbs.
- (2) List 4 Aquatic plants.
- (3) write 5 pet animal names.
- (4) write 5 wild animal names.
- (5) write 5 fruits names.



USES OF COMPUTER



GRADE 2

I. Choose the correct option.

1. Computers are used in _____ for preparing results.
a. hospitals b. schools c. Malls
2. An _____ is used to withdraw money.
a. ATM b. Mobile c. None of these
3. _____ use computers in preparing medical reports.
a. Teachers b. Doctors c. Engineers
4. _____ uses computers for making design of building
a. Pilots b. Engineers c. Doctors

II. True and False.

- a. Computers can do only one type of work. ()
- b. Computers cannot be used in airports. ()
- c. In bank computers are used for booking tickets. ()

- (1) write 5 parts of computer.
- (2) write input and output devices of computer.
- (3) write full form of following abbreviations.

C.P.U

A.L.U

R.O.M

R.A.M

- (4) Discuss the features that make a computer special

Parts Of Computer

Q1. Drag and Drop the correct word below the picture:

(Mouse, Keyboard, CPU, CD, Headphones)



1. नीचे हमारे राष्ट्रीय प्रतीकों के चित्र दिए गए हैं। उन्हें पहचानकर उनके नाम लिखिए- [मातृभूमि के प्रति सम्मान का भाव]



.....



.....




.....



.....



.....



1. आप घर को किस प्रकार स्वच्छ रखते हैं? पाँच पंक्तियाँ लिखिए-
[जीवन मूल्य]

(क)

(ख)

(ग)

(घ)

(ङ)



2. नीचे दी गई टोकरी में से स्वर और व्यंजनों को ढूँढ़कर सही जगह पर लिखिए—

[Application]

स्वर

व्यंजन

अ

क



3. सही वर्ण चुनकर चित्र का नाम पूरा कीजिए—

[Creativity]



फल

स ल



ट

ब क



व

ज न



लश

क भ न



हल

क श म



टर

ग म प

4. रेखा खींचकर विलोम शब्दों का सही मिलान कीजिए—

[Knowledge]

अंदर

पीछे

सीधा

देना

आगे

बाहर


गोरा

उलटा

लेना

काला


1. Colour odd numbered balloons red and even numbered balloons yellow.



2. Write the odd number just before each of the following numbers.



3. Write the even number just after each of the following numbers.



4. Fill in the blanks.

(a) 371 is an _____ (even/odd) number.

(b) The even number just after 138 is _____.

(c) The odd number just after 87 is _____.

(d) The number before and after an odd number is an _____ number.

(e) Odd number + Odd number = _____ number

5. Shivani has 23 pens. How many more pens does she need to make 15 sets of 2s?

6. Write all the odd numbers between:

(a) 42 and 56

(b) 325 and 358

7. Write all the even numbers between 40 and 93.

1. Complete the following.

(a) $\boxed{6} + \boxed{6} + \boxed{6} + \boxed{6} = \boxed{} \times \boxed{6} = \boxed{}$

(b) $\boxed{5} + \boxed{5} + \boxed{5} + \boxed{5} + \boxed{5} = \boxed{} \times \boxed{} = \boxed{}$

(c) $\boxed{9} + \boxed{9} + \boxed{9} + \boxed{9} + \boxed{9} + \boxed{9} = \boxed{} \times \boxed{} = \boxed{}$

2. Fill in the blanks, using properties of multiplication.

(a) $2 \times 5 = 5 \times 2 = \boxed{}$

(b) $4 \times \boxed{} = 4$

(c) $3 \times 9 = \boxed{} \times 3 = \boxed{}$

(d) $\boxed{} \times \boxed{} = 1 \times 8 = \boxed{}$

(e) $5 \times 7 = 7 \times 5 = \boxed{}$

(f) $7 \times 2 = \boxed{} \times \boxed{} = 14$

(g) $6 \times \boxed{} = 0$

(h) $0 \times 9 = \boxed{} \times \boxed{} = \boxed{}$

3. Write each product.

(a) $5 \times 2 = \underline{\hspace{2cm}}$

(b) $4 \times 9 = \underline{\hspace{2cm}}$

(c) $9 \times 8 = \underline{\hspace{2cm}}$

(d) $7 \times 6 = \underline{\hspace{2cm}}$

(e) $5 \times 4 = \underline{\hspace{2cm}}$

(f) $4 \times 7 = \underline{\hspace{2cm}}$

(g) $3 \times 3 = \underline{\hspace{2cm}}$

(h) $7 \times 5 = \underline{\hspace{2cm}}$

(i) $8 \times 10 = \underline{\hspace{2cm}}$

1. Fill in the boxes with the correct numbers. State the property used.

(a) $2 \times 6 = \boxed{} \times 2$

(b) $4 \times 1 = \boxed{}$

(c) $4 \times 8 = \boxed{} \times 4$

(d) $9 \times 6 = 6 \times \boxed{}$

(e) $\boxed{} \times 7 = 7 \times 3$

(f) $8 \times 2 = \boxed{} \times \boxed{}$

(g) $5 \times \boxed{} = 5$

(h) $10 \times 0 = \boxed{}$

(i) $15 \times \boxed{} = 0$

(j) $9 \times 1 = \boxed{}$

(k) $6 \times 1 = \boxed{} \times 6$

(l) $\boxed{} \times 7 = 7 \times 2$

1. Match the subtraction problems having the same answer.

(a)

H	T	O
2	0	9
- 1	3	5

(b)

H	T	O
4	3	7
- 3	1	7

(c)

H	T	O
5	7	8
- 1	9	9

(d)

H	T	O
5	9	9
- 3	0	7

A

H	T	O
4	9	0
- 1	1	1

B

H	T	O
5	6	4
- 2	7	2

C

H	T	O
2	1	5
- 1	4	1

D

H	T	O
4	0	8
- 2	8	8

the answers to the letters and